

School: Seton LP
Grade & Section: G1
Term/Quarter #: T3
Subject: Math
Lesson/Title: Patterns [School ST 1]

Name: _____ Date: _____

I. Directions: Read each question carefully. Circle the letter of the correct answer.

1. What number comes next in this pattern?

144, 112, 144, 112, ?

A. 113

B. 144

C. 142

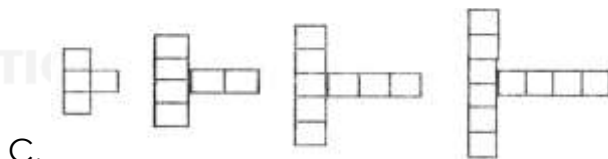
2. Which of the following shows a repeating pattern?

A. 1, 2, 3, 4, 5, 6, 7...

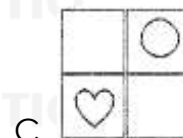
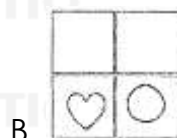
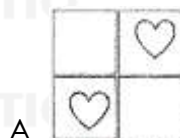
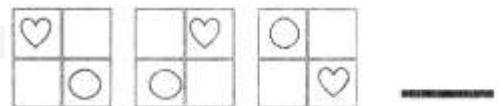
B. A, B, AB, ABC, ABC...

C. 2, B, 2, B, 2, B, 2...








3. Which of the following shows a growing pattern?



4. What is the next figure in the given pattern below?



II. Directions: Observe the pattern in Column A. Color the picture on Column B that continues the pattern.

Column A	Column B
5. 	
6. 	
7. A, B, C, A, B, C, A, B, C, —	
8. 	

9. Use two different colors to fill the shapes and demonstrate REPEATING patterns.



10. Use two different colors to fill the shapes and demonstrate GROWING patterns.

